































America: Where Are You?

Math	Sciences	Reading
1.  Shanghai, China	1.  Shanghai, China	1.  Shanghai, China
2.  Singapore	2.  Finland	2.  South Korea
3.  Hong Kong, China	3.  Hong Kong, China	3.  Finland
4.  South Korea	4.  Singapore	4.  Hong Kong, China
5.  Taiwan	5.  Japan	5.  Singapore
6.  Finland	6.  South Korea	6.  Canada
7.  Liechtenstein	7.  New Zealand	7.  New Zealand
8.  Switzerland	8.  Canada	8.  Japan
9.  Japan	9.  Estonia	9.  Australia
10.  Canada	10.  Australia	10.  Netherlands